


MATH CIRCLE TTU

Topology

Euler Characteristic



$$e^{i\pi} + 1 = 0$$

Euler Characteristic χ

F: "Faces"

V: "Vertices (Corners)"

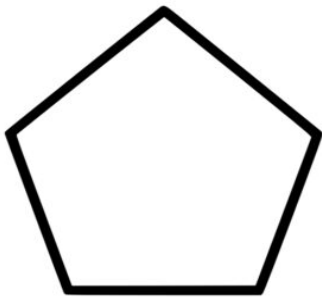
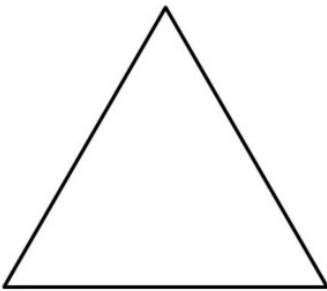
E: "Edges"

$$\chi = F + V - E$$

Planar Regions

Problem 1. Compute the Euler characteristic of the planar region enclosed by:

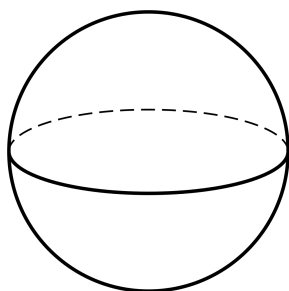
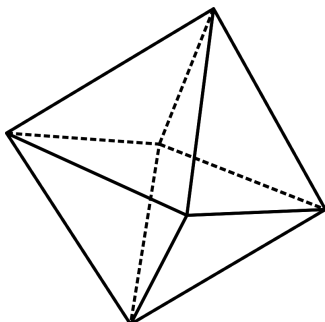
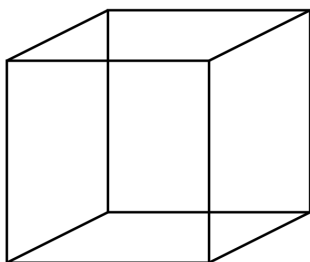
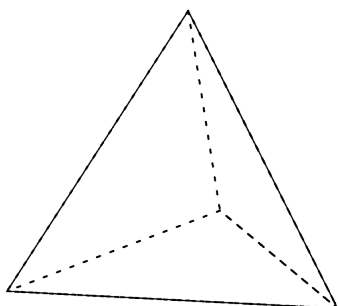
- (i) A triangle.
- (ii) A rectangle.
- (iii) A pentagon.
- (iv) Any polygon.
- (v) A circle.



Polyhedra

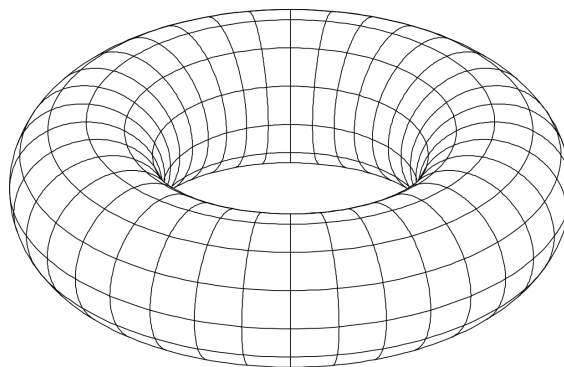
Problem 2. Compute the Euler characteristic of the following polyhedra:

- (i) A tetrahedron.
- (ii) A cube (hexahedron).
- (iii) An octahedron.
- (iv) A sphere.



Closed Surfaces

Problem 3. Compute the Euler characteristic of a torus (donut).



The Mobius Strip

Problem 4. Compute the Euler characteristic of the Mobius strip.

